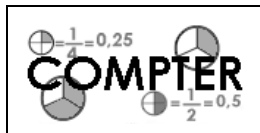


Prénom :

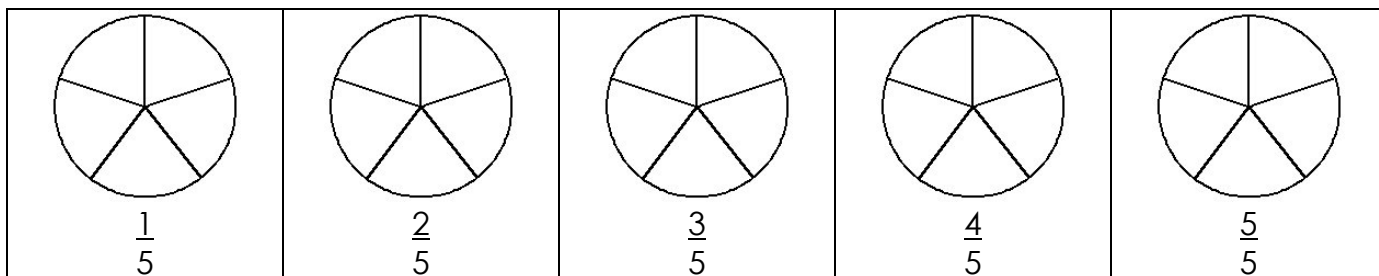
Date :




NUMÉRATION

Les fractions (02)


1./ Colorie la partie demandée de chacune de ces figures :



2./ Indique quelle est la fraction de la surface totale colorée et simplifie si possible :

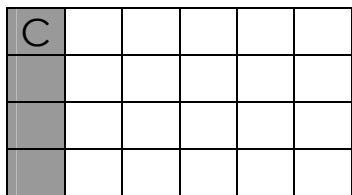


$$: \frac{12}{24} = \frac{1}{2}$$


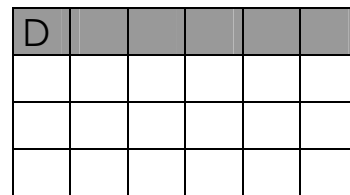


$$: \frac{\dots}{\dots} = \frac{\dots}{\dots}$$

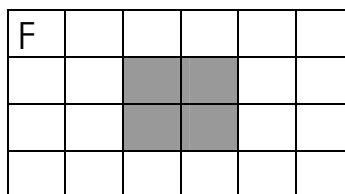
$$\frac{\dots}{\dots} = \frac{\dots}{\dots} :$$



$$\frac{\dots}{\dots} = \frac{\dots}{\dots} :$$

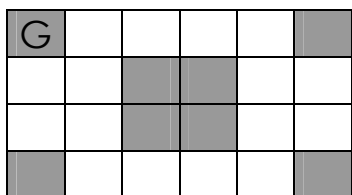


$$: \frac{\dots}{\dots} = \frac{\dots}{\dots}$$

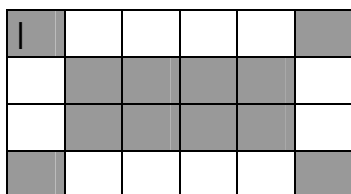



$$: \frac{\dots}{\dots} = \frac{\dots}{\dots}$$


$$\frac{\dots}{\dots} = \frac{\dots}{\dots} :$$



$$\frac{\dots}{\dots} = \frac{\dots}{\dots} :$$




$$: \frac{\dots}{\dots} = \frac{\dots}{\dots}$$



$$: \frac{\dots}{\dots} = \frac{\dots}{\dots}$$

$$\frac{\dots}{\dots} = \frac{\dots}{\dots} :$$



$$\frac{\dots}{\dots} = \frac{\dots}{\dots} :$$

